














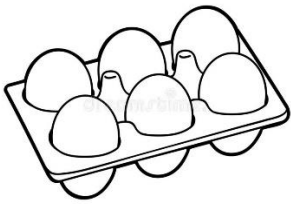

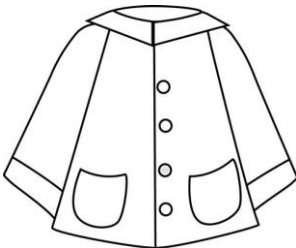
Date: 28/03/22
GRADE: 1

CPE - 04 (2021-22)
EVS

Max marks: 25
Time: 2 Hour

Qn. No	OBJECTIVE	Marks
	Circle the correct option	
1	<p>Which of the following food we get from the plant?</p> <p>A. </p> <p>B. </p> <p>C. </p> <p>D. </p>	1
2	<p>Identify the landform shown in the given picture.</p> <p></p> <p>A. Mountain B. Valley C. Hill D. Plain</p>	1

3	<p>On which of the following days the sun shines brightly?</p>  <p>A. Windy B. Rainy C. Hot D. Cold</p>	1
4	<p>We get wool from _____.</p> <p>A. </p> <p>B. </p> <p>C. </p> <p>D. </p>	1
5	<p>_____ is the meal that we eat in the morning.</p> <p>A. Breakfast B. Lunch C. Dinner</p>	1
6	<p>From where do we get heat and light?</p> <p>A. Sun B. Stars C. Moon D. Clouds</p>	
7	<p>Choose the odd one out</p> <p>A. Apple B. Orange C. Fish D. Pineapple</p>	

17	<p>Sameer went to the supermarket with his mother. His mother told him to choose food items that we get from animals and keep them in the cart. Sameer saw Apples and Eggs. Which food item Sameer should choose?</p> <div style="display: flex; justify-content: space-around; align-items: center;"> <div style="text-align: center;">  <p>Apples</p> </div> <div style="text-align: center;">  <p>Eggs</p> </div> </div> <hr style="width: 100%; margin-top: 10px;"/>	1										
18	<p>It is a hot sunny day. Rohan and his family decide to go to the beach. Rohan has Cotton shirt and Raincoat. Which one he should wear?</p> <div style="display: flex; justify-content: space-around; align-items: center;"> <div style="text-align: center;">  <p>Cotton shirt</p> </div> <div style="text-align: center;">  <p>Raincoat</p> </div> </div> <hr style="width: 100%; margin-top: 10px;"/>	1										
19	<p>Match the following</p> <table border="1" style="width: 100%; border-collapse: collapse;"> <thead> <tr> <th style="width: 50%; text-align: center;">A</th> <th style="width: 50%; text-align: center;">B</th> </tr> </thead> <tbody> <tr> <td>1) Cold day</td> <td>A. Small mountain</td> </tr> <tr> <td>2) Hill</td> <td>B. Fireplace</td> </tr> <tr> <td>3) Hot day</td> <td>C. Shape changes every night</td> </tr> <tr> <td>4) Moon</td> <td>D. Ice cream</td> </tr> </tbody> </table>	A	B	1) Cold day	A. Small mountain	2) Hill	B. Fireplace	3) Hot day	C. Shape changes every night	4) Moon	D. Ice cream	4
A	B											
1) Cold day	A. Small mountain											
2) Hill	B. Fireplace											
3) Hot day	C. Shape changes every night											
4) Moon	D. Ice cream											
20	<p>Where do we get cotton from?</p> <hr style="width: 100%; margin-top: 10px;"/> <hr style="width: 100%; margin-top: 10px;"/>	1										
21	<p>Write one example of Healthy food.</p>	1										

	<hr/> <hr/> <hr/>	
22	Write any two kinds of weather conditions. <hr/> <hr/> <hr/>	1

MAIL ID – shilpanasi.tvvis@gmail.com